

Name _____

\$1 Clues

Each child has \$1 in coins. Use the clue cards to complete the chart. Write how many of each coin are needed. Write the total amount to check.

Derek has
2 coins.






Roxanne has
3 coins.

Jamie has 10 of
the same coin.

Nina has 3 of
one coin and 5 of
another coin.

Elena has only
1 coin.

Todd has 8 of
one coin and 4 of
another coin.

Child						Total Amount
1. Derek						
2. Jamie						
3. Nina						
4. Elena						
5. Todd						
6. Roxanne						